

9.2 Composite Bodies

A *composite body* consists of a series of connected “simpler” shaped bodies, which may be rectangular, triangular, semicircular, etc. Such a body can often be sectioned or divided into its composite parts and, provided the *weight* and location of the center of gravity of each of these parts are known, we can then eliminate the need for integration to determine the center of gravity for the entire body. The method for doing this follows the same procedure outlined in Sec. 9.1. Formulas analogous to Eqs. 9–1 result; however, rather than account for an infinite number of differential weights, we have instead a finite number of weights. Therefore,

$$\bar{x} = \frac{\sum \tilde{x}W}{\sum W} \quad \bar{y} = \frac{\sum \tilde{y}W}{\sum W} \quad \bar{z} = \frac{\sum \tilde{z}W}{\sum W} \quad (9-6)$$

Here

$\bar{x}, \bar{y}, \bar{z}$ represent the coordinates of the center of gravity G of the composite body.

$\tilde{x}, \tilde{y}, \tilde{z}$ represent the coordinates of the center of gravity of each composite part of the body.

$\sum W$ is the sum of the weights of all the composite parts of the body, or simply the total weight of the body.

When the body has a *constant density or specific weight*, the center of gravity *coincides* with the centroid of the body. The centroid for composite lines, areas, and volumes can be found using relations analogous to Eqs. 9–6; however, the W 's are replaced by L 's, A 's, and V 's, respectively. Centroids for common shapes of lines, areas, shells, and volumes that often make up a composite body are given in the table on the inside back cover.



In order to determine the force required to tip over this concrete barrier it is first necessary to determine the location of its center of gravity G . Due to symmetry, G will lie on the vertical axis of symmetry.

Procedure for Analysis

The location of the center of gravity of a body or the centroid of a composite geometrical object represented by a line, area, or volume can be determined using the following procedure.

Composite Parts.

- Using a sketch, divide the body or object into a finite number of composite parts that have simpler shapes.
- If a composite body has a *hole*, or a geometric region having no material, then consider the composite body without the hole and consider the hole as an *additional* composite part having *negative* weight or size.

Moment Arms.

- Establish the coordinate axes on the sketch and determine the coordinates \tilde{x} , \tilde{y} , \tilde{z} of the center of gravity or centroid of each part.

Summations.

- Determine \bar{x} , \bar{y} , \bar{z} by applying the center of gravity equations, Eqs. 9–6, or the analogous centroid equations.
- If an object is *symmetrical* about an axis, the centroid of the object lies on this axis.

If desired, the calculations can be arranged in tabular form, as indicated in the following three examples.



The center of gravity of this water tank can be determined by dividing it into composite parts and applying Eqs. 9–6.

EXAMPLE 9.9

Locate the centroid of the wire shown in Fig. 9-16a.

SOLUTION

Composite Parts. The wire is divided into three segments as shown in Fig. 9-16b.

Moment Arms. The location of the centroid for each segment is determined and indicated in the figure. In particular, the centroid of segment ① is determined either by integration or by using the table on the inside back cover.

Summations. For convenience, the calculations can be tabulated as follows:

Segment	L (mm)	\bar{x} (mm)	\bar{y} (mm)	\bar{z} (mm)	$\bar{x}L$ (mm ²)	$\bar{y}L$ (mm ²)	$\bar{z}L$ (mm ²)
1	$\pi(60) = 188.5$	60	-38.2	0	11 310	-7200	0
2	40	0	20	0	0	800	0
3	20	0	40	-10	0	800	-200
	$\Sigma L = 248.5$				$\Sigma \bar{x}L = 11\,310$	$\Sigma \bar{y}L = -5600$	$\Sigma \bar{z}L = -200$

Thus,

$$\bar{x} = \frac{\Sigma \bar{x}L}{\Sigma L} = \frac{11\,310}{248.5} = 45.5 \text{ mm} \quad \text{Ans.}$$

$$\bar{y} = \frac{\Sigma \bar{y}L}{\Sigma L} = \frac{-5600}{248.5} = -22.5 \text{ mm} \quad \text{Ans.}$$

$$\bar{z} = \frac{\Sigma \bar{z}L}{\Sigma L} = \frac{-200}{248.5} = -0.805 \text{ mm} \quad \text{Ans.}$$

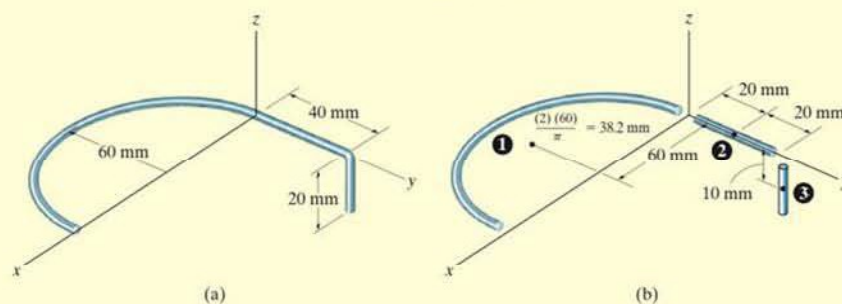


Fig. 9-16

EXAMPLE 9.10

Locate the centroid of the plate area shown in Fig. 9-17a.

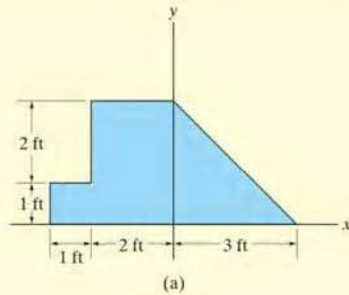


Fig. 9-17

SOLUTION

Composite Parts. The plate is divided into three segments as shown in Fig. 9-17b. Here the area of the small rectangle ③ is considered “negative” since it must be subtracted from the larger one ②.

Moment Arms. The centroid of each segment is located as indicated in the figure. Note that the \tilde{x} coordinates of ② and ③ are *negative*.

Summations. Taking the data from Fig. 9-17b, the calculations are tabulated as follows:

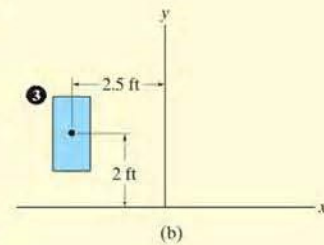
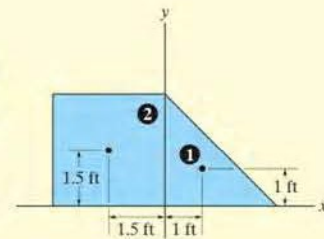
Segment	$A \text{ (ft}^2\text{)}$	$\tilde{x} \text{ (ft)}$	$\tilde{y} \text{ (ft)}$	$\tilde{x}A \text{ (ft}^3\text{)}$	$\tilde{y}A \text{ (ft}^3\text{)}$
1	$\frac{1}{2}(3)(3) = 4.5$	1	1	4.5	4.5
2	$(3)(3) = 9$	-1.5	1.5	-13.5	13.5
3	$-(2)(1) = -2$	-2.5	2	5	-4
	$\Sigma A = 11.5$			$\Sigma \tilde{x}A = -4$	$\Sigma \tilde{y}A = 14$

Thus,

$$\bar{x} = \frac{\Sigma \tilde{x}A}{\Sigma A} = \frac{-4}{11.5} = -0.348 \text{ ft} \quad \text{Ans.}$$

$$\bar{y} = \frac{\Sigma \tilde{y}A}{\Sigma A} = \frac{14}{11.5} = 1.22 \text{ ft} \quad \text{Ans.}$$

NOTE: If these results are plotted in Fig. 9-17, the location of point C seems reasonable.



EXAMPLE 9.11



Fig. 9-18

Locate the center of mass of the assembly shown in Fig. 9-18a. The conical frustum has a density of $\rho_c = 8 \text{ Mg/m}^3$, and the hemisphere has a density of $\rho_h = 4 \text{ Mg/m}^3$. There is a 25-mm-radius cylindrical hole in the center of the frustum.

SOLUTION

Composite Parts. The assembly can be thought of as consisting of four segments as shown in Fig. 9-18b. For the calculations, ③ and ④ must be considered as “negative” segments in order that the four segments, when added together, yield the total composite shape shown in Fig. 9-18a.

Moment Arm. Using the table on the inside back cover, the computations for the centroid \bar{z} of each piece are shown in the figure.

Summations. Because of symmetry, note that

$$\bar{x} = \bar{y} = 0$$

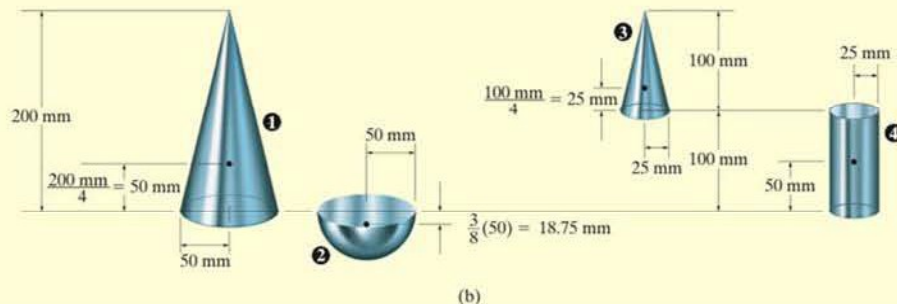
Ans.

Since $W = mg$, and g is constant, the third of Eqs. 9-6 becomes $\bar{z} = \Sigma \bar{z}m / \Sigma m$. The mass of each piece can be computed from $m = \rho V$ and used for the calculations. Also, $1 \text{ Mg/m}^3 = 10^{-6} \text{ kg/mm}^3$, so that

Segment	$m \text{ (kg)}$	$\bar{z} \text{ (mm)}$	$\bar{z}m \text{ (kg} \cdot \text{mm)}$
1	$8(10^{-6})\left(\frac{1}{3}\right)\pi(50)^2(200) = 4.189$	50	209.440
2	$4(10^{-6})\left(\frac{2}{3}\right)\pi(50)^3 = 1.047$	-18.75	-19.635
3	$-8(10^{-6})\left(\frac{1}{3}\right)\pi(25)^2(100) = -0.524$	$100 + 25 = 125$	-65.450
4	$-8(10^{-6})\pi(25)^2(100) = -1.571$	50	-78.540
	$\Sigma m = 3.142$		$\Sigma \bar{z}m = 45.815$

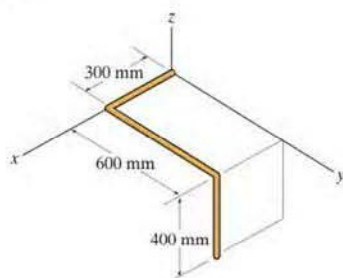
$$\text{Thus, } \bar{z} = \frac{\Sigma \bar{z}m}{\Sigma m} = \frac{45.815}{3.142} = 14.6 \text{ mm}$$

Ans.



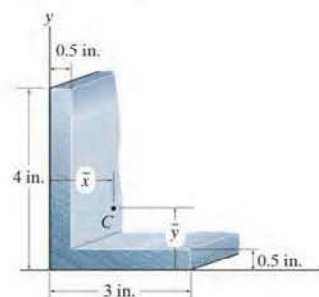
FUNDAMENTAL PROBLEMS

F9-7. Locate the centroid $(\bar{x}, \bar{y}, \bar{z})$ of the wire bent in the shape shown.



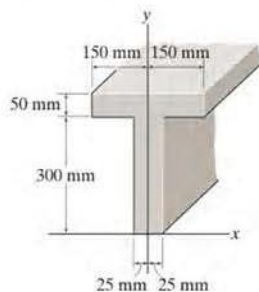
F9-7

F9-10. Locate the centroid (\bar{x}, \bar{y}) of the cross-sectional area.



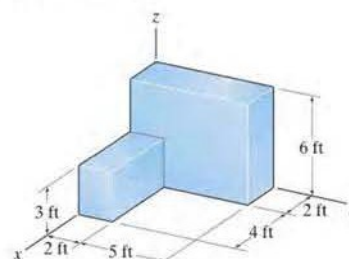
F9-10

F9-8. Locate the centroid \bar{y} of the beam's cross-sectional area.



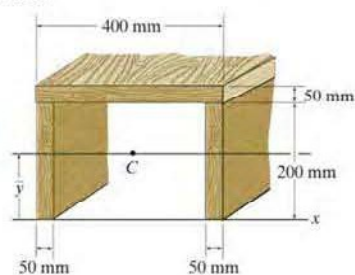
F9-8

F9-11. Locate the center of mass $(\bar{x}, \bar{y}, \bar{z})$ of the homogeneous solid block.



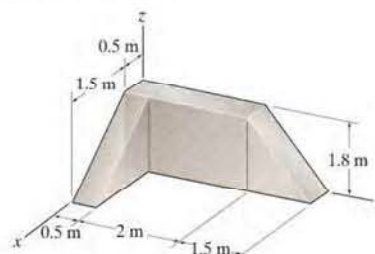
F9-11

F9-9. Locate the centroid \bar{y} of the beam's cross-sectional area.



F9-9

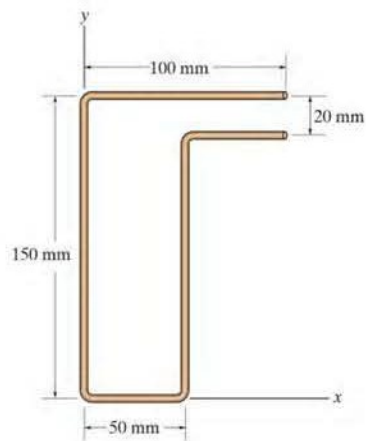
F9-12. Determine the center of mass $(\bar{x}, \bar{y}, \bar{z})$ of the homogeneous solid block.



F9-12

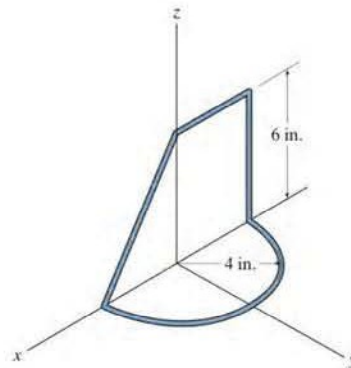
PROBLEMS

*9-44. Locate the centroid (\bar{x}, \bar{y}) of the uniform wire bent in the shape shown.



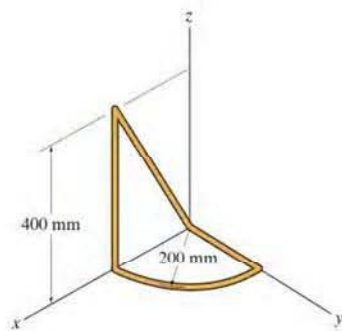
Prob. 9-44

9-46. Locate the centroid $(\bar{x}, \bar{y}, \bar{z})$ of the wire.



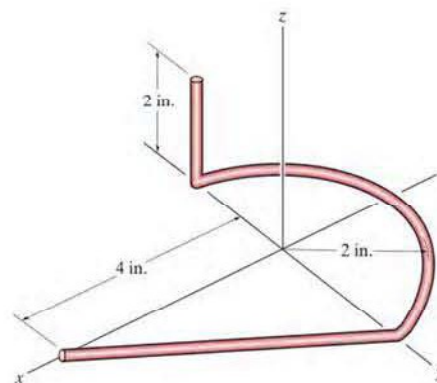
Prob. 9-46

•9-45. Locate the centroid $(\bar{x}, \bar{y}, \bar{z})$ of the wire.



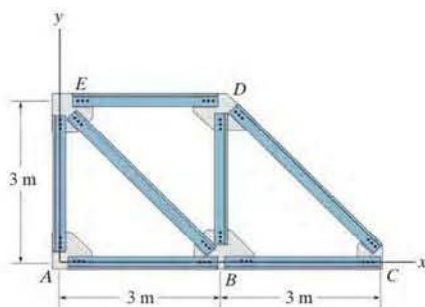
Prob. 9-45

9-47. Locate the centroid $(\bar{x}, \bar{y}, \bar{z})$ of the wire which is bent in the shape shown.



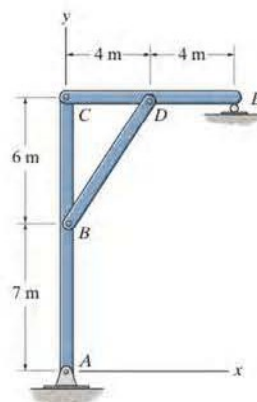
Prob. 9-47

***9–48.** The truss is made from seven members, each having a mass per unit length of 6 kg/m. Locate the position (\bar{x}, \bar{y}) of the center of mass. Neglect the mass of the gusset plates at the joints.



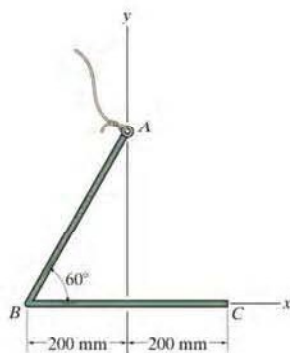
Prob. 9–48

9–50. Each of the three members of the frame has a mass per unit length of 6 kg/m. Locate the position (\bar{x}, \bar{y}) of the center of mass. Neglect the size of the pins at the joints and the thickness of the members. Also, calculate the reactions at the pin A and roller E .



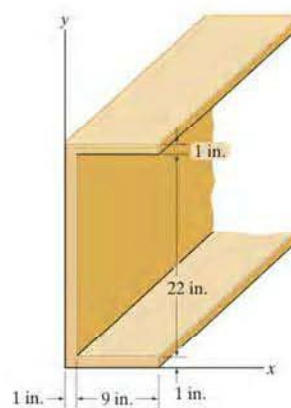
Prob. 9–50

•9–49. Locate the centroid (\bar{x}, \bar{y}) of the wire. If the wire is suspended from A , determine the angle segment AB makes with the vertical when the wire is in equilibrium.



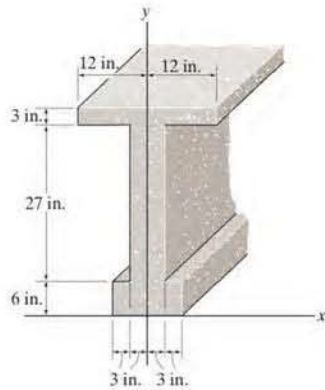
Prob. 9–49

9–51. Locate the centroid (\bar{x}, \bar{y}) of the cross-sectional area of the channel.



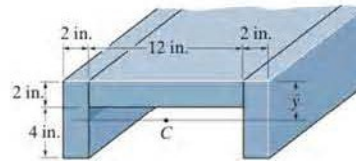
Prob. 9–51

*9-52. Locate the centroid \bar{y} of the cross-sectional area of the concrete beam.



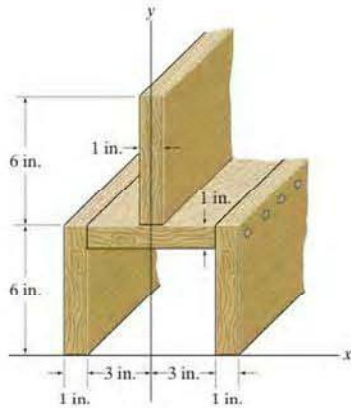
Prob. 9-52

9-54. Locate the centroid \bar{y} of the channel's cross-sectional area.



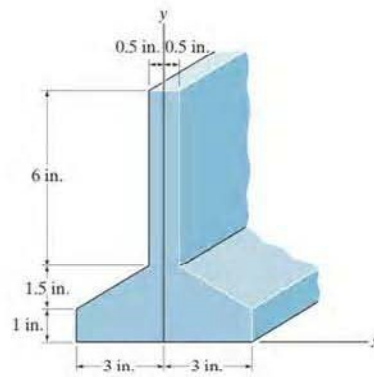
Prob. 9-54

•9-53. Locate the centroid \bar{y} of the cross-sectional area of the built-up beam.



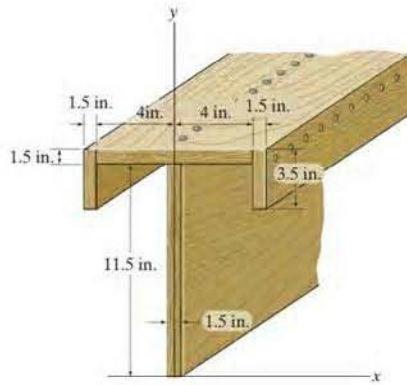
Prob. 9-53

9-55. Locate the distance \bar{y} to the centroid of the member's cross-sectional area.



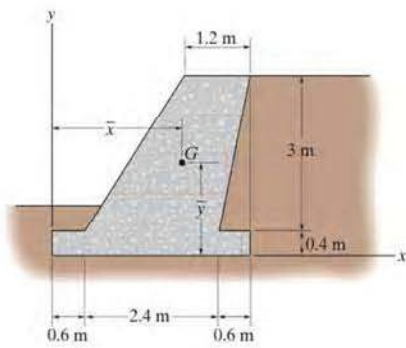
Prob. 9-55

*9-56. Locate the centroid \bar{y} of the cross-sectional area of the built-up beam.



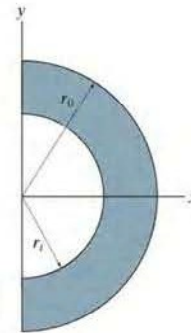
Prob. 9-56

•9-57. The gravity wall is made of concrete. Determine the location (\bar{x}, \bar{y}) of the center of mass G for the wall.



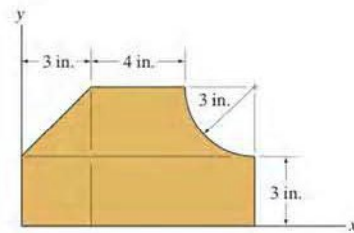
Prob. 9-57

9-58. Locate the centroid \bar{x} of the composite area.



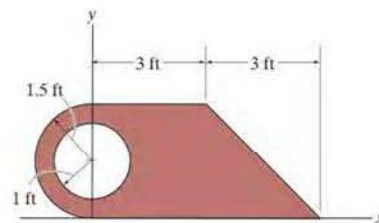
Prob. 9-58

9-59. Locate the centroid (\bar{x}, \bar{y}) of the composite area.



Prob. 9-59

*9-60. Locate the centroid (\bar{x}, \bar{y}) of the composite area.



Prob. 9-60

This document was created with Win2PDF available at <http://www.daneprairie.com>.
The unregistered version of Win2PDF is for evaluation or non-commercial use only.